

PHY2048 EXAM 1 (PRACTICE)

Spring 2020

Prof. Douglas H. Laurence

Abstract

This exam consists of xx multiple choice questions. **You must record your answers on a Scantron sheet.** Don't record your answers on this print-out; I will not accept it as a submission. Fill out the Scantron sheet in with a pencil, not a pen. **Don't forget to include your name, the course, and exam number on the Scantron sheet.**

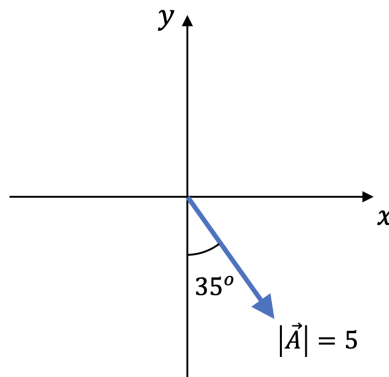


Figure 1: Figure for Problem 1

1. What is the y -component of the vector \vec{A} , shown in Figure 1 above?
 - (a) -2.87
 - (b) 2.87
 - (c) -4.10
 - (d) 4.10
2. Consider the vector $\vec{A} = -2\hat{i} + 4\hat{j}$. What is the direction of \vec{A} ? Measure the angle **counter-clockwise from the $+x$ -axis**.
 - (a) 27°
 - (b) 63°
 - (c) 117°
 - (d) 243°

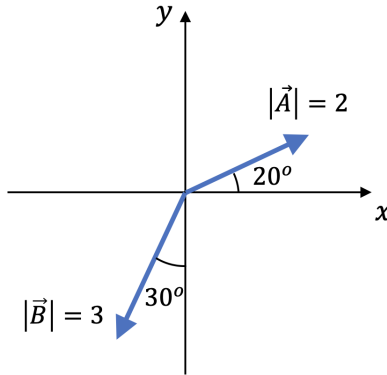


Figure 2: Figure for Problems 3 and 4

3. Consider the vectors \vec{A} and \vec{B} , as shown in Figure 2 above. What is the x -component of $\vec{A} + \vec{B}$?
 - (a) 0.4
 - (b) 1.5
 - (c) 1.9
 - (d) 3.4
4. Consider the vectors \vec{A} and \vec{B} , as shown in Figure 2 above. What is $\vec{A} \cdot \vec{B}$?
 - (a) 3.9
 - (b) -3.9
 - (c) 4.6
 - (d) -4.6
5. Consider the vectors $\vec{A} = -\hat{i} + 3\hat{j}$ and $\vec{B} = 2\hat{i} + \hat{k}$. What is the cross product, $\vec{A} \times \vec{B}$?
 - (a) $3\hat{i} + \hat{j} - 6\hat{k}$
 - (b) $-3\hat{i} + \hat{j} + 6\hat{k}$
 - (c) $3\hat{i} - \hat{j} + 6\hat{k}$
 - (d) $-3\hat{i} - \hat{j} + 6\hat{k}$
6. Under what conditions can kinematics be used?
 - (a) Kinematics can always be used
 - (b) Only if the acceleration of an object is constant
 - (c) Only if the speed of an object is constant
 - (d) Only if the motion of an object is in a straight line
7. A jogger runs half of a circular track in 100s. If the radius of the track is 100m, what is the jogger's average **velocity**?
 - (a) 2 m/s
 - (b) 3.14 m/s
 - (c) 4 m/s
 - (d) 6.28 m/s

8. A car accelerates at 4.7 m/s^2 , from rest, to a top speed of 57 m/s . How long does it take the car to reach its top speed?
- (a) 4.7s
 - (b) 12.1s
 - (c) 57s
 - (d) 267.9s
9. An Olympic sprinter can run the 100m dash in about 10s. If the sprinter's acceleration were constant during the sprint, what would it be?
- (a) 2 m/s^2
 - (b) 5 m/s^2
 - (c) 10 m/s^2
 - (d) 20 m/s^2
10. The observatory on the 82nd floor of the Empire State Building is 320m above the ground. If you dropped a penny from there, with what speed would it hit the ground?
- (a) 8 m/s
 - (b) 10 m/s
 - (c) 80 m/s
 - (d) $6,400 \text{ m/s}$
11. How fast would you have to throw an object upward for it to reach a height of 12.5m?
- (a) 0 m/s
 - (b) 10 m/s
 - (c) 15.8 m/s
 - (d) 250 m/s
12. A car accelerates from rest at 6 m/s^2 for 5s. What is the car's average velocity during this time?
- (a) 0 m/s
 - (b) 15 m/s
 - (c) 30 m/s
 - (d) 45 m/s
13. A car accelerates from rest at 5 m/s^2 for 200m. Suddenly, the car brakes at 7 m/s^2 until stopped. How long does the entire trip take?
- (a) 6.4s
 - (b) 8.9s
 - (c) 10.2s
 - (d) 15.3s

14. A bicycle's velocity points in the $-x$ -direction while its acceleration points in the $+x$ -direction. Which of the following statements about the bicycle is true?
- (a) The bicycle is slowing down
 - (b) The bicycle is speeding up
 - (c) The bicycle's speed isn't changing
 - (d) There isn't enough information given to know the behavior of the bicycle's speed

15. An object moves with the following equation of motion:

$$x(t) = \alpha t + \beta t^3 - \gamma t^5$$

with the constants $\alpha = 1$ m/s, $\beta = 2.5$ m/s³, and $\gamma = 1.5$ m/s⁵. What is the object's acceleration at $t = 0.5$ s?

- (a) -1.75 m/s²
 - (b) 2.41 m/s²
 - (c) 3.75 m/s²
 - (d) 4.75 m/s²
16. A projectile is launched with a speed of 15 m/s at an angle of 30° . At its peak, what is its speed?
- (a) 0 m/s
 - (b) 7.5 m/s
 - (c) 13 m/s
 - (d) 15 m/s
17. A projectile is launched with a speed of 15 m/s at an angle of 30° . After 1s, what is the projectile's acceleration?
- (a) 2.5 m/s²
 - (b) 10 m/s²
 - (c) 13 m/s²
 - (d) 15 m/s²
18. A projectile is fired off the roof of a 15m tall building, with a speed of 17 m/s and angle of 40° above the horizontal. What is the maximum height, above the ground, of the projectile?
- (a) 3m
 - (b) 12m
 - (c) 15m
 - (d) 21m

19. A projectile is fired off the roof of a 15m tall building, with a speed of 17 m/s and angle of 40° above the horizontal. How far away from the building does the projectile land?
- (a) 14.3m
 - (b) 24.7m
 - (c) 28.6m
 - (d) 40.8m
20. Which of the following statements is true regarding the trajectory of a projectile?
- (a) The trajectory is always symmetric
 - (b) The trajectory is symmetric only if the projectile starts and ends at the same height
 - (c) The trajectory is symmetric only if the projectile starts and ends at the same location
 - (d) The trajectory is never symmetric
21. During uniform circular motion, which of the following quantities is constant?
- (a) Position
 - (b) Speed
 - (c) Velocity
 - (d) Acceleration
22. The International Space Stations (ISS) moves with a roughly uniform, circular motion, with a period of 92.7 minutes and a speed of 7.66 km/s. What is the radius of the ISS' orbit?
- (a) 113km
 - (b) 710km
 - (c) 6,781km
 - (d) 42,604km
23. The International Space Stations (ISS) moves with a roughly uniform, circular motion, with a period of 92.7 minutes and a speed of 7.66 km/s. What is the angular velocity of the ISS?
- (a) 0.00082 rad/s
 - (b) 0.00113 rad/s
 - (c) 0.0678 rad/s
 - (d) 0.82 rad/s
24. True or false: the weight pulling an object downward, and the equal/opposite normal force pushing the object upward, form an action/reaction pair as defined by Newton's third law?
- (a) True
 - (b) False

25. A 3.5kg box is pushed along a flat surface by the following forces:

$$\vec{F}_1 = (10\text{N})\hat{i} - (5\text{N})\hat{j}$$
$$\vec{F}_2 = -(2\text{N})\hat{i} + (3\text{N})\hat{j}$$

What is the acceleration of the box? Consider the $+y$ -direction to be upward.

- (a) 2.29 m/s²
 - (b) 3.43 m/s²
 - (c) 8 m/s²
 - (d) 10 m/s²
26. A 3.5kg box is pushed along a flat surface by the following forces:

$$\vec{F}_1 = (10\text{N})\hat{i} - (5\text{N})\hat{j}$$
$$\vec{F}_2 = -(2\text{N})\hat{i} + (3\text{N})\hat{j}$$

What is the normal force on the box?

- (a) 27N
 - (b) 33N
 - (c) 37N
 - (d) 43N
27. A box of mass m is pushed with an equation of motion:

$$x(t) = \alpha t + \beta t^3 - \gamma t^5$$

The net force acting on this box must be given by equation equation:

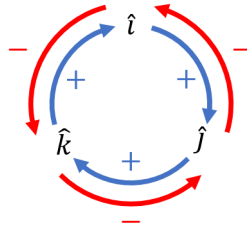
- (a) $\Sigma F(t) = m\alpha t + m\beta t^3 - m\gamma t^5$
 - (b) $\Sigma F(t) = m\alpha + 3m\beta t^2 - 5m\gamma t^4$
 - (c) $\Sigma F(t) = 6\beta t - 20\gamma t^3$
 - (d) $\Sigma F(t) = 6m\beta t - 20m\gamma t^3$
28. An elevator accelerates upward at 2 m/s². If a 5kg box sits on the floor of the elevator, what is the normal force on the box?
- (a) 0N
 - (b) 40N
 - (c) 50N
 - (d) 60N

FORMULA SHEET

- Vectors:

$$\begin{aligned}\vec{A} \cdot \vec{B} &= AB \cos \theta \\ &= A_x B_x + A_y B_y + A_z B_z\end{aligned}$$

$$|\vec{A} \times \vec{B}| = AB \sin \theta$$



- Kinematics:

$$g = 10 \text{ m/s}^2$$

$$\vec{v}_{av} = \frac{\Delta \vec{x}}{\Delta t}; \quad \vec{v}(t) = \frac{d\vec{x}}{dt}$$

$$\vec{a}_{av} = \frac{\Delta \vec{v}}{\Delta t}; \quad \vec{a}(t) = \frac{d\vec{v}}{dt}$$

$$\Delta x = v_0 t + \frac{1}{2} a t^2$$

$$v = v_0 + a t$$

$$v^2 = v_0^2 + 2a\Delta x$$

- Circular motion:

$$a_c = \frac{v^2}{r} = \omega^2 r$$

$$v = \omega r$$

$$\omega = \frac{2\pi}{T}$$

- Forces:

$$\sum \vec{F} = m\vec{a}$$

$$W = mg$$

ANSWERS

- | | |
|---------|---------|
| 1. (c) | 15. (c) |
| 2. (c) | 16. (c) |
| 3. (a) | 17. (b) |
| 4. (d) | 18. (d) |
| 5. (a) | 19. (d) |
| 6. (b) | 20. (b) |
| 7. (a) | 21. (b) |
| 8. (b) | 22. (c) |
| 9. (a) | 23. (b) |
| 10. (c) | 24. (b) |
| 11. (c) | 25. (a) |
| 12. (b) | 26. (c) |
| 13. (d) | 27. (d) |
| 14. (a) | 28. (d) |